



SARALA BIRLA
PUBLIC SCHOOL
(SARALA BIRLA GROUP OF SCHOOLS)

SARALA BIRLA PUBLIC SCHOOL

Mahilong, Ranchi



Weekly Assignment - I (2024-25)

Subject : MATHS

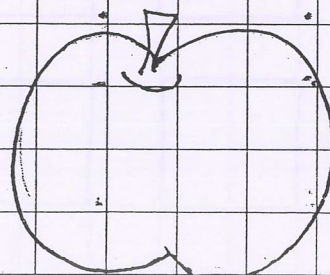
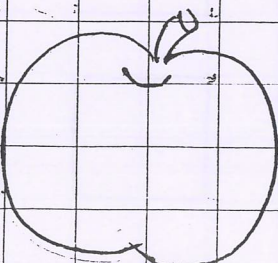


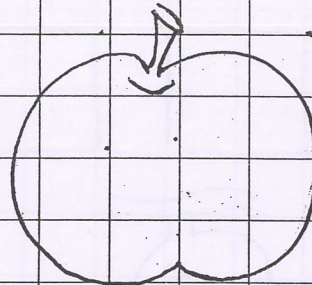

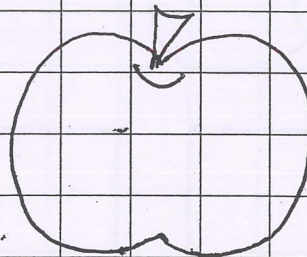

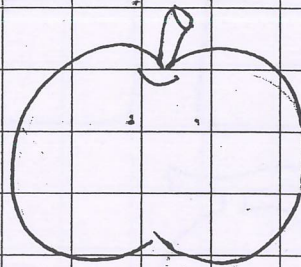
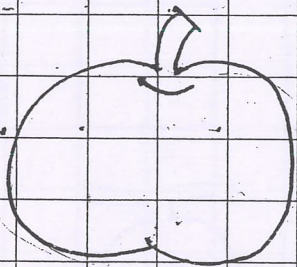
Name : _____

Class/Sec. : NURSERY

UID : _____

Roll No. : _____

Q 1. Write the numbers from 1 to 10.



Q2. Identify the numbers written on the mangoes, then colour the squares accordingly.

