



SARALA BIRLA
PUBLIC SCHOOL
(SARALA BIRLA GROUP OF SCHOOLS)

SARALA BIRLA PUBLIC SCHOOL

Mahilong, Ranchi



Weekly Assignment- I (2024-25)

Subject : Maths

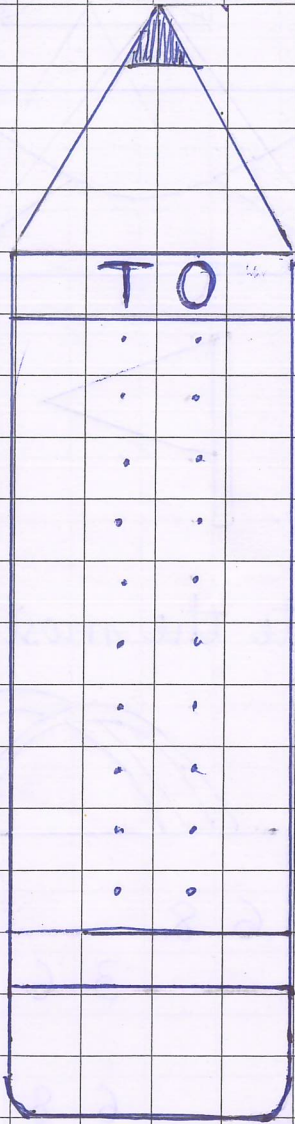

Name : _____

Class/Sec. : K.g I

UID : _____

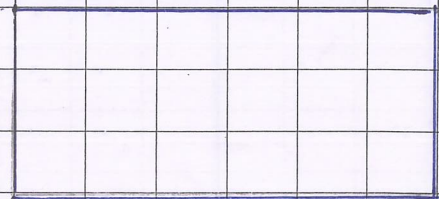
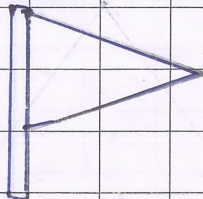
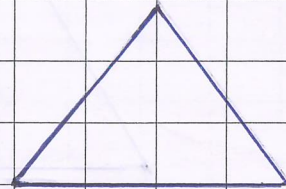

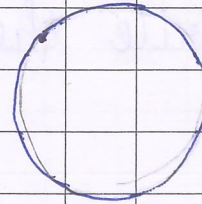


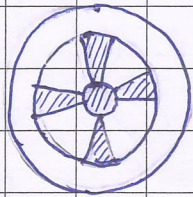
Roll No. : _____

Q. 1. Write the numbers from 51 to 70.



Q. 2.

Match the following :-



Q. 3. Write the most repeated number in the box.

6	8	6	8
	3	6	
	6	8	
5	7	6	8

5	7	6	3
	5	7	
	6	3	
5	7	5	7