

Weekly Assignment (2024-25)


Class : I

Subject : Mathematics


Instructions:

*Do all the questions .

- Q1) Appu and Gappu are playing with balls . The balls have three digit numbers and there are holes in the ground with number names . Help them by matching each numbers with its number names .
(0.5 x 8 = 4 marks)




- Q2) Write the numbers in the given boxes that come before, after and between. (1x5=5marks)



Q3) Identify the number .

(1x5=5marks)

1) A number greater than 900 and having digits 2, 4 and 9



2) 1 less than 1000



3) 100 more than 750



4) The predecessor of 800




5) The successor of 999



Q4) Write forward counting from 851 to 860 .

(5 marks)



Q5) Write the greatest and the smallest 3-digit number using the given digits .

(0.5x4=2marks)

a) 2, 9, 7



b) 1, 8, 5



Q6) Make 3- digit numbers using the given digits and arrange them in order as indicated. (1x3=3marks)

a) 6, 0, 8



Ascending Order



Descending Order



Q7) Draw the beads on the abacus to represent the given number.

(1x1=1 mark)

a)

