

Pick out the correct option:

Q1 Which of the following is the number name of 369?

- a) Three hundred six
- b) Three hundred ninety-six
- c) Three hundred sixty-nine
- d) Three hundred forty

Q2 Write down the next number:

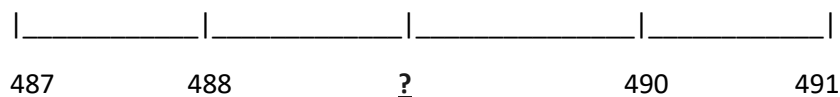
248, 249, 250, _____

- a) 253
- b) 249
- c) 251
- d) 258

Q3 Which number comes before 500?

- a) 599
- b) 498
- c) 499
- d) 490

Q4 Which number is missing from number line?



- a) 489
- b) 409
- c) 498
- d) 418

Q5 Write down the number four hundred forty?

- a) 440
- b) 404
- c) 400
- d) 436

Q6 What comes after 299?

- a) 298
- b) 300
- c) 290
- d) 293

Q7 Pick out the smallest numeral?

- a) 235
- b) 75
- c) 356
- d) 418

Q8 What is the number between 99 and 101?

- a) 90
- b) 102
- c) 100
- d) 110

Q10 Pick out the number which is equal to 155?

- a) 105
- b) 55
- c) 155
- d) 150

Q11 Which number is the greatest?

- a) 9
- b) 99
- c) 199
- d) 499

Q12 Pick out the number which is greater than 350?

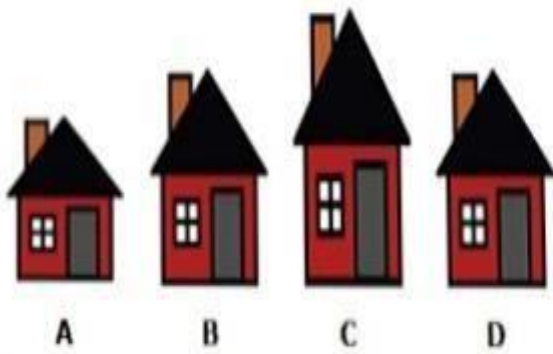
- a) 299
- b) 300
- c) 450
- d) 98

Q13 How many more stars are there than the sun?



- a) 5
- b) 4
- c) 3
- d) 6

Q14 Which of the following houses are of same height?




- a) A B
- b) B C
- c) B D
- d) A C

Q15 What comes after 99?

- a) 100
- b) 101
- c) 98
- d) 110

Project:

Draw and colour a turkey as shown. Fill in the details using the number **395** in the same format as shown in the figure.



Note: All the work should be done in the assignment copy