

Std IV-G.K

India in Pictures

Which state or Union Territory does each picture remind you of? Circle the correct options.



Punjab / Kerala




Odisha / Lakshadweep



Chandigarh / Mizoram

WEBLINK

To play an interactive game on the states of India, visit rsgr.in/is4gk-2.




Goa / Madhya Pradesh

INDIA

4

A Sporty Puzzle

Read the clues.
Complete the
word puzzle.



ACROSS

- 2 India has won many gold medals in this sport at the Asian Games.
- 5 The UEFA European Championship is associated with this sport.
- 5 The word 'Grandmaster' is associated with this sport.

DOWN

- 1 A game played with a bat and a ball by two teams of nine players each.
- 3 This team sport is played with an oval-shaped ball.
- 4 This is played with a curved stick and a ball.

FactWise

Swapna Oraon and Chandra Oraon play for India's national women's rugby team. They live in Jalpaiguri (West Bengal).



Chandra



Friends of Earth

These people work for the environment. Write their names. Choose from the box.

Norma Alvares Romulus Earl Whitaker
Jane Goodall Sunjoy Monga

ENVIRONMENT




1. I worked to save the sand dunes of Goa.

Norma Alvares

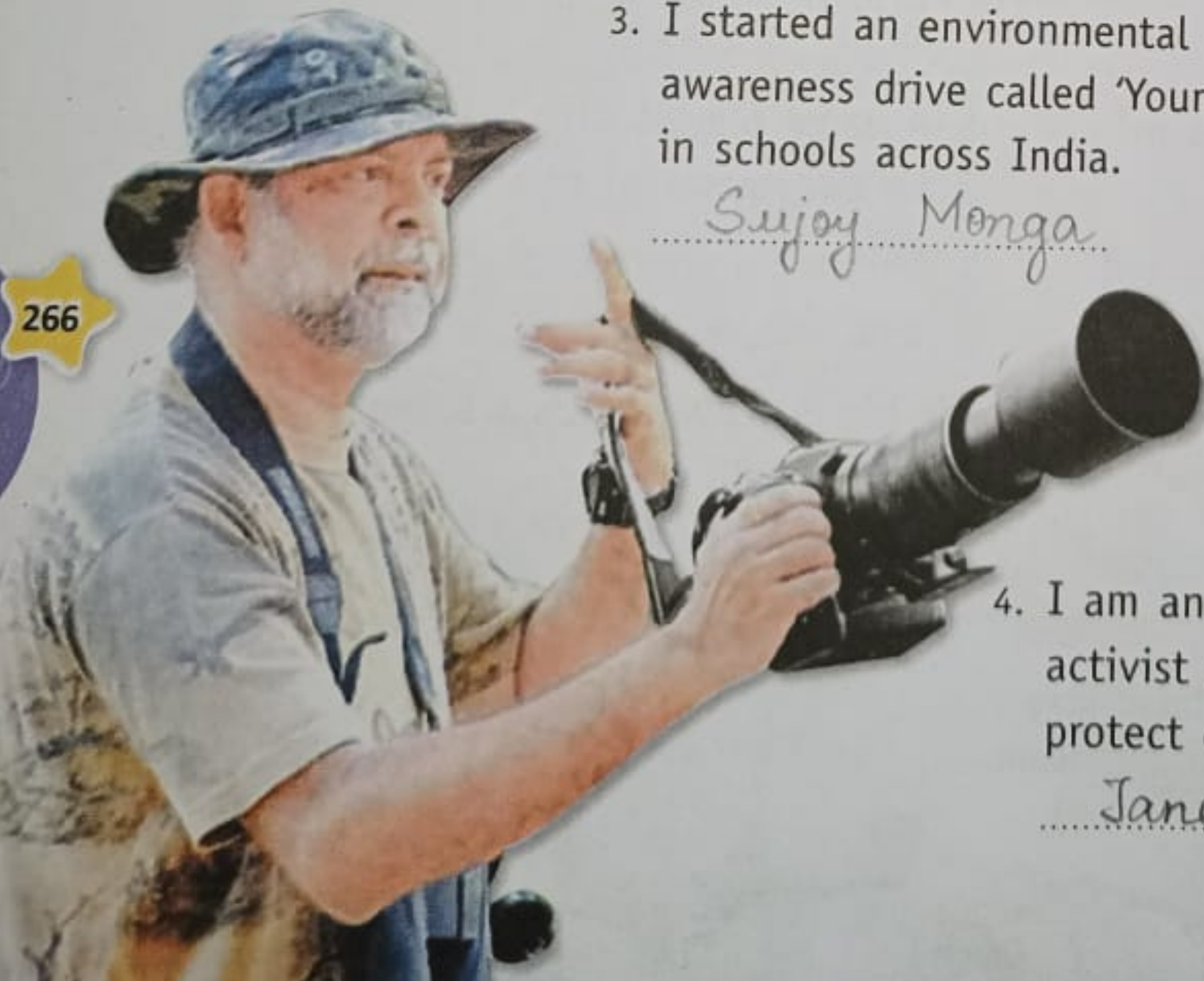
2. I am the founder of the Guindy Snake Park and the Madras Crocodile Bank Trust.

Romulus Earl Whitaker



3. I started an environmental awareness drive called 'Young Rangers' in schools across India.

Sunjoy Monga



4. I am an animal rights activist and work to protect chimpanzees.

Jane Goodall



A Mix-up!

A. Identify the words from their mirror images. Write on the blanks.

1. EKORT2 STROKE 2. ЯЭPΛEHC CHEAPER
 3. KCIUD QUICK 4. ƆRƆAB BARGE

B. Fill in the blanks. Choose words from the brackets.

1. Wood is to carpenter as cloth (cloth/paper) is to tailor.
 2. Sikkim is to Gangtok as Manipur is to Imphal (Shillong/Imphal)
 3. Fruit is to banana as mammal is to cow (snake/cow)
 4. (Ocean/Mountain) Ocean is to waves as desert is to sand dunes.

C. Circle the correct options.

1. Anil introduces Rohit as the son of the only brother of his father's wife? How is Rohit related to Anil? cousin / uncle
 2. Ria starts from her house and walks 3 kilometres north. Then she turns left to reach the school. In which direction is she walking now? east / west



D. Which figure will come next in each series? Tick (✓) the correct options.

1.

—	→	→	→
---	---	---	---

 a.

→	✓
---	---

 b.

→	
---	--

2.

	┌	┌	┌
--	---	---	---

 a.

┌	
---	--

 b.

┌	✓
---	---

