

SARALA BIRLA PUBLIC SCHOOL

Birla Knowledge City, Mahilong, Ranchi

Session - 2021-22

Assignment - II



Class: KG I

Subject: Mathematics

Note: Complete the following questions in classwork copy.

I. What comes before:-

T	O	T	O
		1	2
		1	6
		2	4
		2	7
		3	0

T	O	T	O
		3	3
		3	8
		4	1
		4	5
		5	0

II. Count, draw pictures, colour and put the correct sign . (>,<=)

Example:-




2 apples




3 apples

1) 5 carrots




3 carrots

2) 2 tomatoes



7 tomatoes

3) 6 mangoes



6 mangoes

